

# MATHS ASSIGNMENT



## CLASS: 2.      ADDITION

**1. Count and write the number .**



**Ex-**

 +  =


**a)**

 +  =

**b)**

 +  =

**c)**

 +  =

Q2. Add the following numbers with the 2 digit numbers.

Ex-. T O

$$\begin{array}{r} 87 \\ + 12 \\ \hline 99 \end{array}$$

a) T O

$$\begin{array}{r} 66 \\ + 23 \\ \hline \end{array}$$

b) T O

$$\begin{array}{r} 52 \\ + 34 \\ \hline \end{array}$$

c) T O

$$\begin{array}{r} 31 \\ + 64 \\ \hline \end{array}$$

d) T O

$$\begin{array}{r} 53 \\ + 43 \\ \hline \end{array}$$

Q3. Addition of 3- digit numbers:-

Ex- H T O

$$\begin{array}{r} 653 \\ + 122 \\ \hline 775 \end{array}$$

a) H T O

$$\begin{array}{r} 310 \\ + 625 \\ \hline \end{array}$$

b) H T O

$$\begin{array}{r} 758 \\ + 131 \\ \hline \end{array}$$

c) H T O

$$\begin{array}{r} 981 \\ + 001 \\ \hline \end{array}$$

d) H T O

$$\begin{array}{r} 632 \\ + 167 \\ \hline \end{array}$$

**Q4. Add the following 2 digit numbers with carry over.**

**Ex- T O**

**Sums:-**

**a) T O**

**4 9**

**+ 7 7**

**1**

**2 5**

**+ 4 7**

**7 2**

**b) T O**

**4 8**

**+ 3 8**

**c) T O**

**1 2**

**+ 6 8**

**d) T O**

**3 6**

**+ 0 4**

**Q5. Add the following 3 digit numbers with carry over.**

**Ex- H T O**

**Sums:-**

**a) H T O**

**2 1 8**

**+ 2 9 2**

**1 1**

**2 8 4**

**+ 3 2 7**

**6 1 1**

**b) H T O**

**1 7 8**

**+ 2 3 7**

**c) H T O**

**3 0 8**

**+ 1 2 6**

**d) H T O**

**4 2 7**

**+ 3 4 4**